

**Introduction:**

Refer to these boxes during the class.

**Q1). Count and write the number of squares in the given figures:**

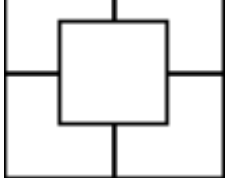
1).  = \_\_\_\_\_

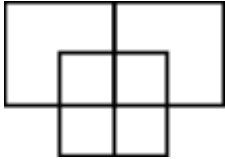
2).  = \_\_\_\_\_


3).  = \_\_\_\_\_

4).  = \_\_\_\_\_

5).  = \_\_\_\_\_

6).  = \_\_\_\_\_

7).  = \_\_\_\_\_

8).  = \_\_\_\_\_

Q2). Count and write the number of triangles in the given figures:

